

Solve each problem.


Answers

1) Henry spent \$11.22 buying some new toys. He bought them using a twenty dollar bill. How much change should he get back?



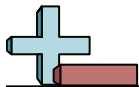
- 1. _____
- 2. _____
- 3. _____

2) Cody bought \$7.02 worth of groceries. He gave the cashier a ten dollar bill. How much change should he get back?



3) Emily spent \$13.83 on a movie ticket. She gave the cashier a twenty dollar bill. How much change should she get back?





Solve each problem.


1) Henry spent \$11.22 buying some new toys. He bought them using a twenty dollar bill. How much change should he get back?



2) Cody bought \$7.02 worth of groceries. He gave the cashier a ten dollar bill. How much change should he get back?



3) Emily spent \$13.83 on a movie ticket. She gave the cashier a twenty dollar bill. How much change should she get back?



Answers

1. **B**

2. **B**

3. **A**